

# Lab Equipment Identification Worksheet

Write the name of each lab equipment on the line.

1.



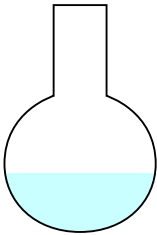
\_\_\_\_\_

2.



\_\_\_\_\_

3.



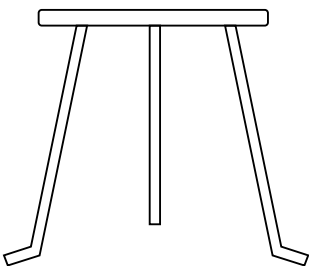
\_\_\_\_\_

4.



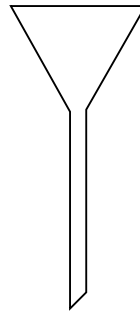
\_\_\_\_\_

5.



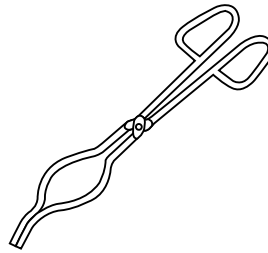
\_\_\_\_\_

6.



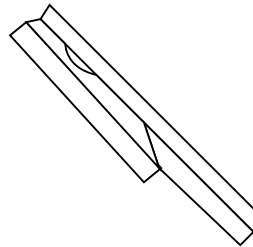
\_\_\_\_\_

7.



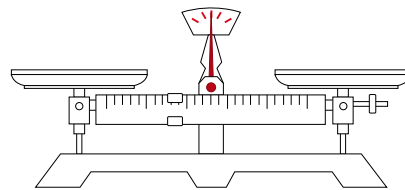
\_\_\_\_\_

8.



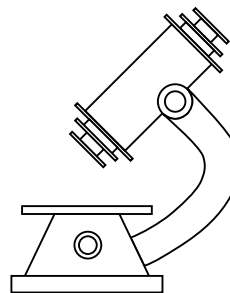
\_\_\_\_\_

9.



\_\_\_\_\_

10



\_\_\_\_\_